


Nom


Date

❖ LES NOMBRES DE 20 À 29


1. Écris les additions sous forme de dizaines et d'unités.



10	+	10	+	1	=	
—		—		—		—



—	+	—	+	—	=	—
---	---	---	---	---	---	---



—	+	—	+	—	=	—
---	---	---	---	---	---	---

2. Calcule puis écris le résultat en chiffres.

20	+	7	=	—
----	---	---	---	---

20	+	4	=	—
----	---	---	---	---

10	+	10	+	6	=	—
----	---	----	---	---	---	---

3. Écris en chiffres.

vingt-deux	=									
vingt-huit	=									
vingt-six	=									