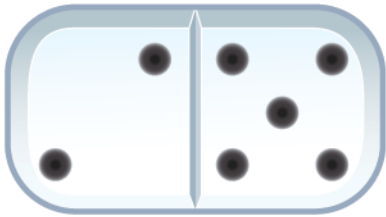


## Les signes + et =

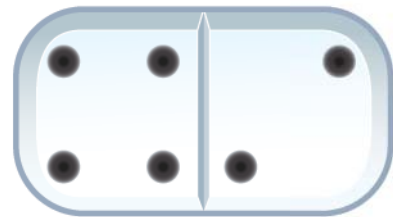
Nom :

Date :

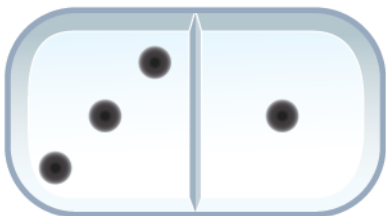
Observe attentivement puis complète les opérations.



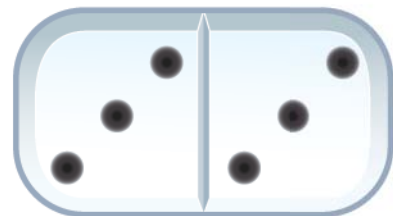
$$2 + 5 = 7$$



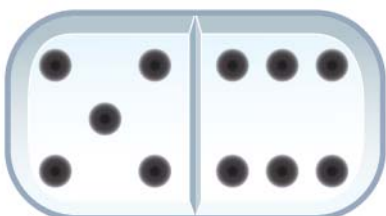
$$.... + 2 = 6$$



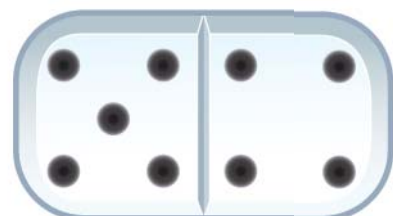
$$3 + 1 = ....$$



$$3 + .... = 6$$



$$5 + ... = 11$$



$$5 + 4 = ....$$