

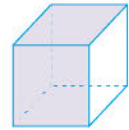
Nom

Date

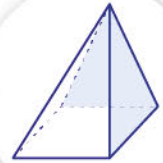
» LA GEOMETRIE

Relie chaque nom à la figure qui convient.

Le pavé



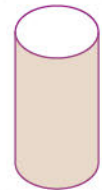
La pyramide



le cône



le cylindre



le cube

